

ST. ANTHONY'S SR. SEC. SCHOOL
(2021-2022)
EXTRA QUESTIONS
CLASS – 1
MATHS









Learn number names 1 – 20

Q.1

Write each missing number.

1		3		5			8
9		11		13			16
17		19		21			24
25		27		29			32
33		35		37			40
41		43		45			48
				49			50

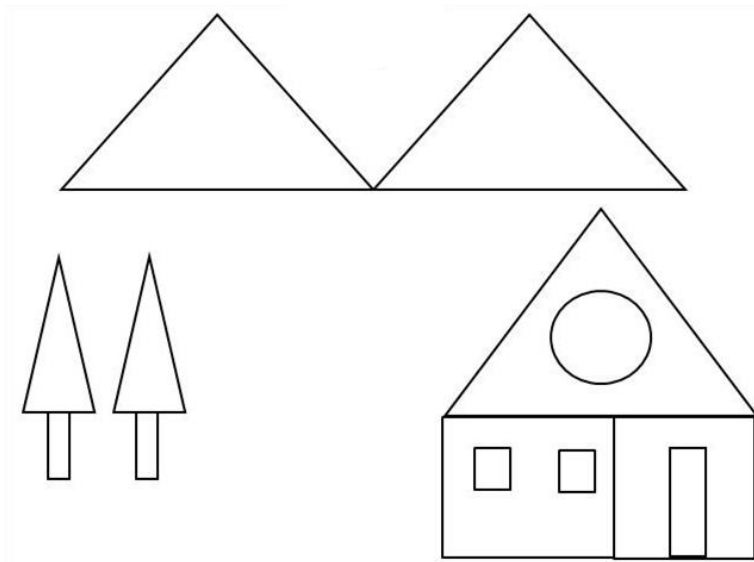
**Q.2 How many apples are on each tree? Write the number in the box.
Circle the trees that have 0 apples.**

	<input type="text"/>		<input type="text"/>
<input type="text"/>			<input type="text"/>
	<input type="text"/>	<input type="text"/>	
<input type="text"/>			<input type="text"/>





Q.3 Circle the correct answer.

	10 6 8
	7 8 9
	6 7 5
	8 7 9

Q.4














Count the shapes in the above picture.

	_____		_____
	_____		_____

Q.5

How many cakes are still needed to make 10 ? (Circle the correct number).

How many books are still needed to make 10 ? (Circle the correct number).

